

1

a)



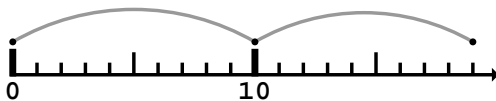
+ =

b)



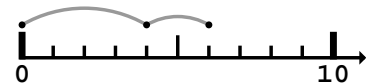
+ =

c)



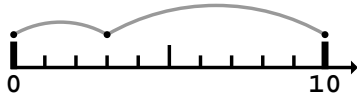
+ =

d)



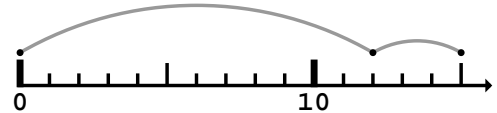
+ =

e)



+ =

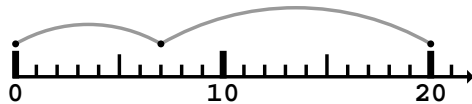
f)



+ =

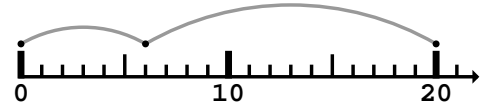
2

a)



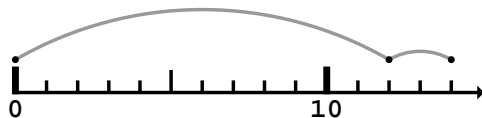
+ =

b)



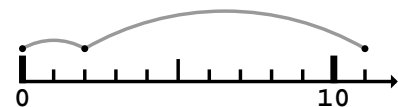
+ =

c)



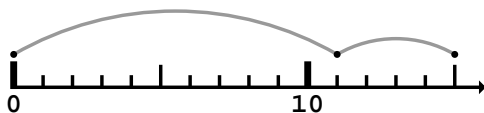
+ =

d)



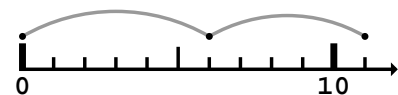
+ =

e)



+ =

f)

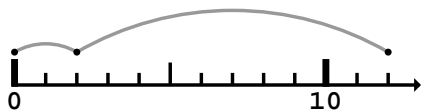


+ =



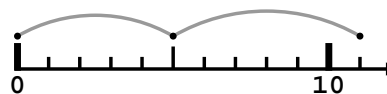
1

a)



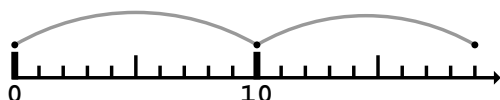
$$\boxed{2} + \boxed{10} = \boxed{12}$$

b)



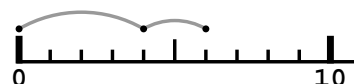
$$\boxed{5} + \boxed{6} = \boxed{11}$$

c)



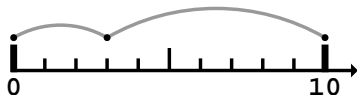
$$\boxed{10} + \boxed{9} = \boxed{19}$$

d)



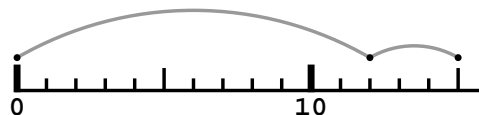
$$\boxed{4} + \boxed{2} = \boxed{6}$$

e)



$$\boxed{3} + \boxed{7} = \boxed{10}$$

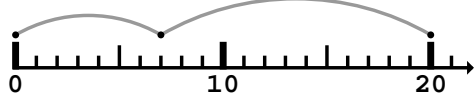
f)



$$\boxed{12} + \boxed{3} = \boxed{15}$$

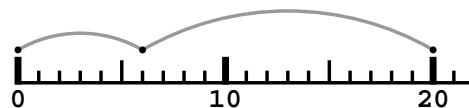
2

a)



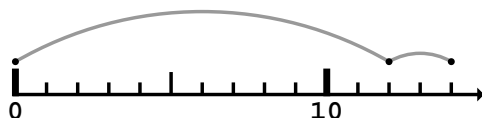
$$\boxed{7} + \boxed{13} = \boxed{20}$$

b)



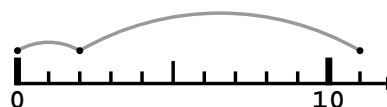
$$\boxed{6} + \boxed{14} = \boxed{20}$$

c)



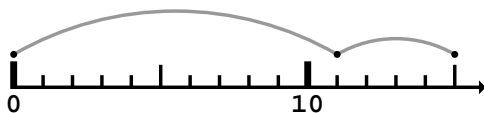
$$\boxed{12} + \boxed{2} = \boxed{14}$$

d)



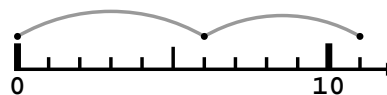
$$\boxed{2} + \boxed{9} = \boxed{11}$$

e)



$$\boxed{11} + \boxed{4} = \boxed{15}$$

f)



$$\boxed{6} + \boxed{5} = \boxed{11}$$

