

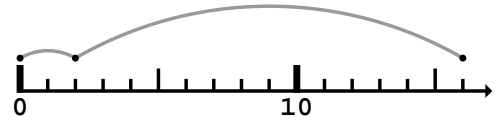
1

a)



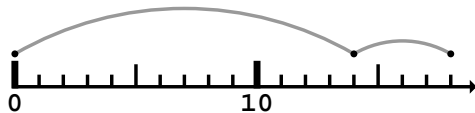
+ =

b)



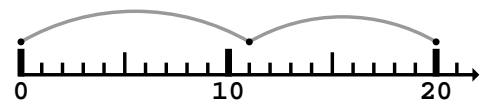
+ =

c)




+ =

d)



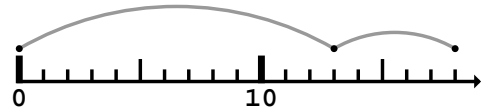
+ =

e)



+ =

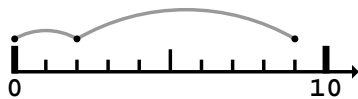
f)



+ =

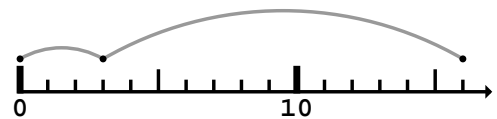
2

a)



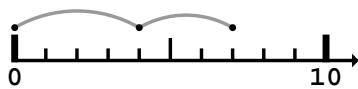
+ =

b)



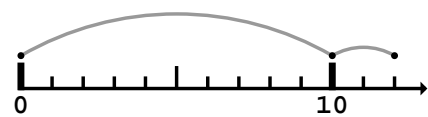
+ =

c)



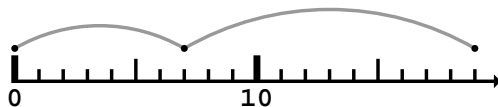
+ =

d)



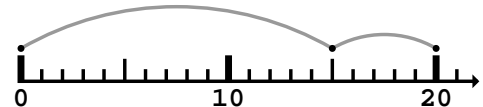
+ =

e)



+ =

f)

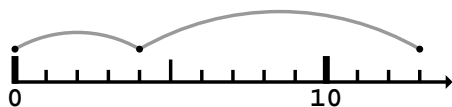


+ =



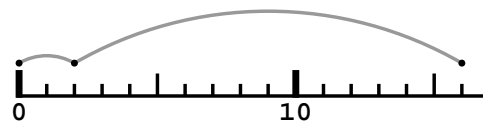
1

a)



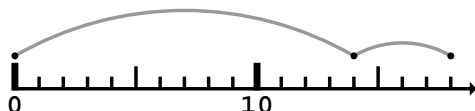
$$\boxed{4} + \boxed{9} = \boxed{13}$$

b)



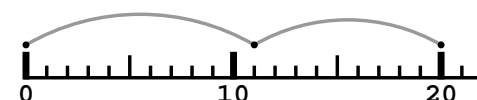
$$\boxed{2} + \boxed{14} = \boxed{16}$$

c)



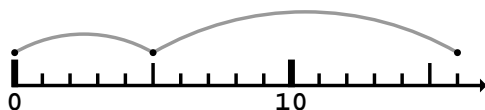
$$\boxed{14} + \boxed{4} = \boxed{18}$$

d)



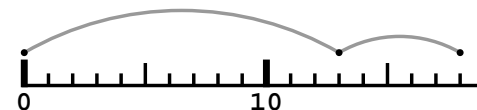
$$\boxed{11} + \boxed{9} = \boxed{20}$$

e)



$$\boxed{5} + \boxed{11} = \boxed{16}$$

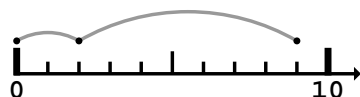
f)



$$\boxed{13} + \boxed{5} = \boxed{18}$$

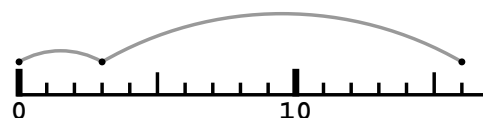
2

a)



$$\boxed{2} + \boxed{7} = \boxed{9}$$

b)



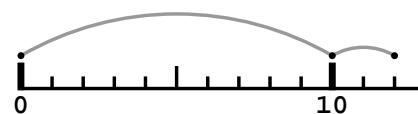
$$\boxed{3} + \boxed{13} = \boxed{16}$$

c)



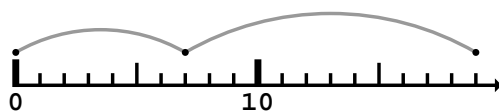
$$\boxed{4} + \boxed{3} = \boxed{7}$$

d)



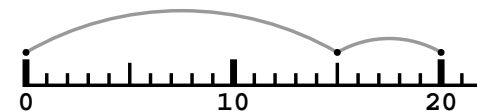
$$\boxed{10} + \boxed{2} = \boxed{12}$$

e)



$$\boxed{7} + \boxed{12} = \boxed{19}$$

f)



$$\boxed{15} + \boxed{5} = \boxed{20}$$

